

Name: \_\_\_\_\_

## Popcorn Sales Pictograph

Four Boy Scouts sold popcorn for one month. The list below shows how much money was collected by each Boy Scout.

**John - \$75**

**Logan - \$30**

**Carter - \$60**

**Andrew - \$45**

Use the information from the list to complete the pictograph below and answer the questions.

Name	Money Collected
John	
Carter	
Logan	
Andrew	

### KEY

Each  = 5 dollars

- How much money did the boys collect in all? 1. \_\_\_\_\_
- How much more money did Carter collect than Andrew? 2. \_\_\_\_\_
- Which two boys sold a total of \$120 of popcorn? 3. \_\_\_\_\_
- Who sold more popcorn than Logan, but less than Carter? 4. \_\_\_\_\_

# ANSWER KEY

## Popcorn Sales Pictograph

Four Boy Scouts sold popcorn for one month. The list below shows how much money was collected by each Boy Scout.





John - \$75

Logan - \$30

Carter - \$60

Andrew - \$45

Use the information from the list to complete the pictograph below and answer the questions.

Name	Money Collected
John	
Carter	
Logan	
Andrew	

### KEY

Each  = 5 dollars

- How much money did the boys collect in all? 1. 210
- How much more money did Carter collect than Andrew? 2. 15
- Which two boys sold a total of \$120 of popcorn? 3. John and Andrew
- Who sold more popcorn than Logan, but less than Carter? 4. Andrew